


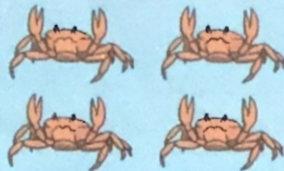
Under The Sea Addition

Count the pictures and write down the answers in the circles.


05/01/21



+



=




4

4



+



=




6

4



+



=



3

3



+



=



5


2



+



=



4

1

05/01/21

Subtraction From 10

$$8 - 2 =$$




Subtraction From 10

$$9 - 6 =$$



Subtraction From 10

$$10 - 4 =$$



Joshua

Subtraction From 10


$$2 - 2 =$$




06/01/21

Carrot Club

Add the number of things and write your answers in the box.




+




7

$$4 + 3 = 7$$




+




8

$$6 + 2 = 8$$




+



10

$$5 + 5 = 10$$




+




9

$$8 + 1 = 9$$



+



9

$$3 + 6 = 9$$


Joshua

Minibeast Subtraction

Joshua

06/01/21

Write the answers in the circles. Then write the number sentence on the line below.




-


1

=

3



$$4 - 1 = 3$$



-

3

=

4

$$7 - 3 = 4$$



-

2

=

7



$$9 - 2 = 7$$



-

5

=

1



$$6 - 5 = 1$$



-

4

=

4



$$8 - 4 = 4$$

07/01/21

Subtraction From 10

$$3 - 0 = \boxed{3}$$



Subtraction From 10

$$9 - 1 = \boxed{8}$$



Subtraction From 10

$$10 - 2 = \boxed{8}$$



Joshua

Subtraction From 10

$$10 - 5 = \boxed{5}$$

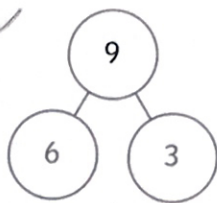
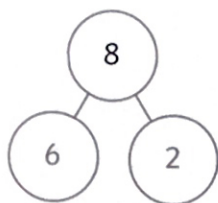


Addition and Subtraction Fact Families to 10

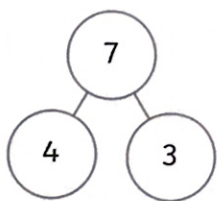
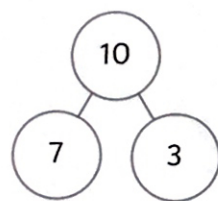
For each set of numbers, write four different addition and subtraction facts.

08/01/21

Joshua




$\boxed{6} + \boxed{2} = \boxed{8}$	$\boxed{6} + \boxed{3} = \boxed{9}$
$\boxed{2} + \boxed{6} = \boxed{8}$	$\boxed{7} + \boxed{2} = \boxed{9}$
$\boxed{10} - \boxed{2} = \boxed{8}$	$\boxed{9} - \boxed{0} = \boxed{9}$
$\boxed{9} - \boxed{1} = \boxed{8}$	$\boxed{10} - \boxed{1} = \boxed{9}$




$\boxed{7} + \boxed{3} = \boxed{10}$	$\boxed{4} + \boxed{3} = \boxed{7}$
$\boxed{5} + \boxed{5} = \boxed{10}$	$\boxed{7} + \boxed{0} = \boxed{7}$
$\boxed{11} - \boxed{1} = \boxed{10}$	$\boxed{8} - \boxed{1} = \boxed{7}$
$\boxed{12} - \boxed{2} = \boxed{10}$	$\boxed{9} - \boxed{2} = \boxed{7}$

08/01/21


Number Bonds to 10 Ten-Frames




$$5 + 5 = 10$$




$$1 + 9 = 10$$




$$3 + 7 = 10$$



$$4 + 6 = 10$$




$$8 + 2 = 10$$



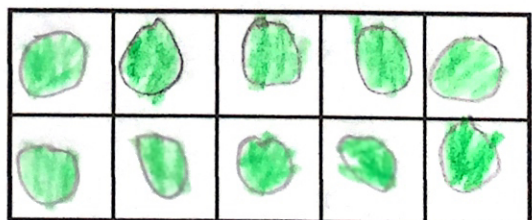
$$9 + 1 = 10$$

Joshua



$$2 + 8 = 10$$

Can you create your own?



$$10 + 0 = 10$$